

Name _____

Klasse _____ Lehrer _____

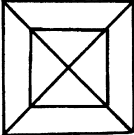
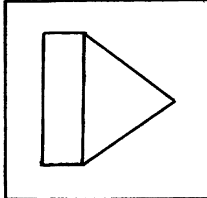
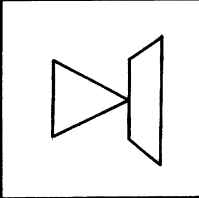
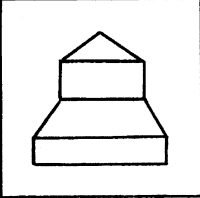
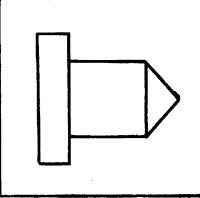

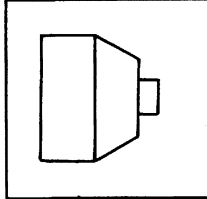
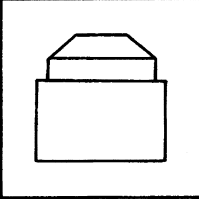
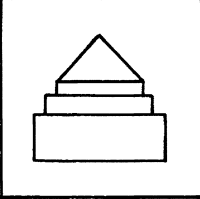
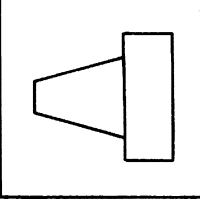
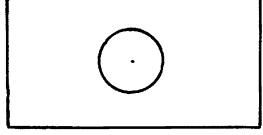
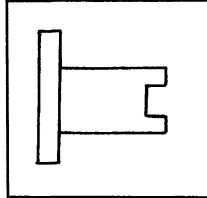
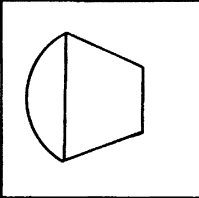
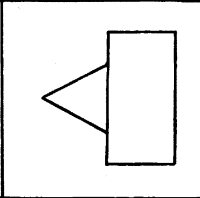
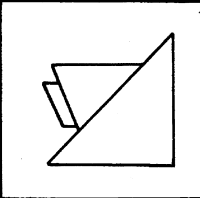
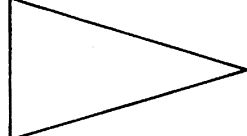
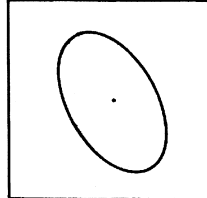
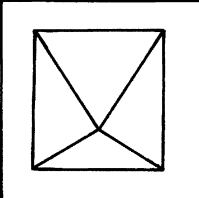
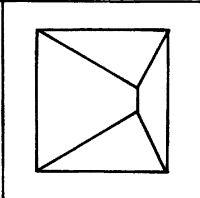
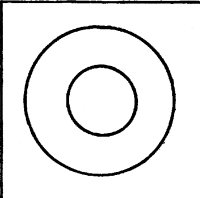
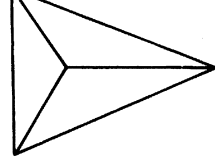
Datum _____

Test

Räumliches Vorstellungsvermögen

10 Minuten

Arbeitsauftrag: Finde heraus, welche der vier abgebildeten Seitenansichten den links abgebildeten Körper darstellt.

A		1	2	3	4	<input type="checkbox"/>			
									
		B		1	2		3	4	<input type="checkbox"/>
									
				C			1	2	
									
D						1	2	3	
									
		E				1	2	3	4
				